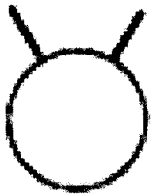
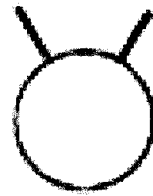


Rozlož a vypočítaj:

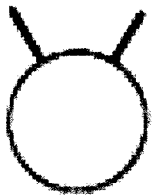
$4 + 6 + 8 = \square$



$5 + 2 + 8 = \square$




$9 + 1 + 2 = \square$



$5 + 5 + 3 = \square$




$7 + 6 + 4 = \square$



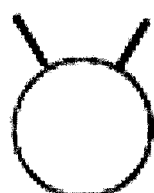
$7 + 3 + 8 = \square$




$3 + 4 + 6 = \square$




$8 + 5 + 5 = \square$



$8 + 2 + 5 = \square$



$6 + 4 + 2 = \square$



Rozlož a vypočítej:

Jméno: \_\_\_\_\_

$9 + 2 = \square\square$



$8 + 3 = \square\square$



$7 + 4 = \square\square$



$6 + 5 = \square\square$



$9 + 9 = \square\square$



$4 + 8 = \square\square$



$4 + 7 = \square\square$



$9 + 3 = \square\square$



$8 + 4 = \square\square$



$6 + 6 = \square\square$



$4 + 9 = \square\square$



$3 + 8 = \square\square$



$8 + 5 = \square\square$



$7 + 6 = \square\square$



$3 + 9 = \square\square$



$5 + 9 = \square\square$



$7 + 7 = \square\square$



$6 + 9 = \square\square$



$5 + 8 = \square\square$



$9 + 5 = \square\square$



$8 + 6 = \square\square$



$7 + 5 = \square\square$



$8 + 8 = \square\square$



$5 + 6 = \square\square$



$2 + 9 = \square\square$



$9 + 6 = \square\square$



$8 + 9 = \square\square$

